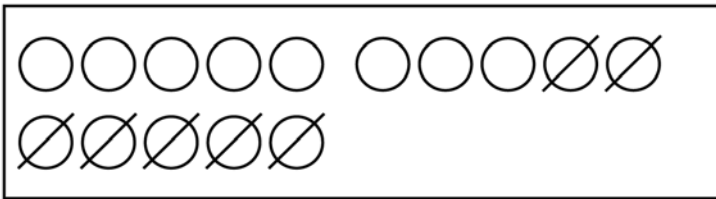


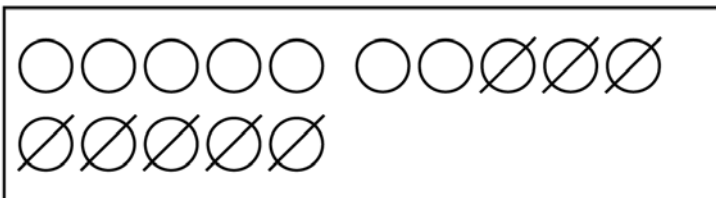
$$15 - \boxed{6} = \underline{\quad}$$

$$15 - \boxed{5} - \boxed{\quad} = \underline{\quad}$$



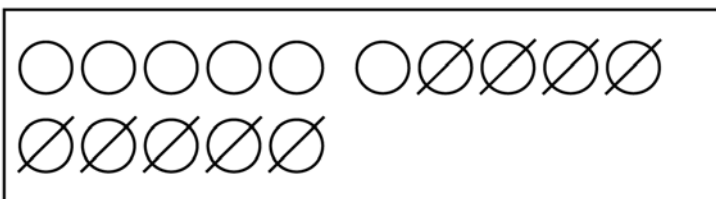
$$15 - \boxed{7} = \underline{\quad}$$

$$15 - \boxed{5} - \boxed{\quad} = \underline{\quad}$$



$$15 - \boxed{8} = \underline{\quad}$$

$$15 - \boxed{5} - \boxed{\quad} = \underline{\quad}$$



$$15 - \boxed{9} = \underline{\quad}$$

$$15 - \boxed{5} - \boxed{\quad} = \underline{\quad}$$